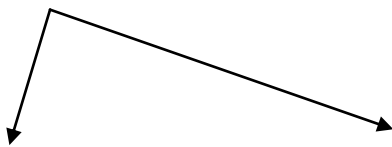


Estimate then measure the angle. Name the angle.

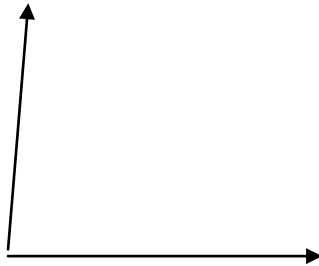
Estimate all angles within 15° . Write your estimate in the box provided.
When all answers are completed, measure the angle with a protractor.
Name each angle using letters of your choice and the correct math symbol



Estimate

Name


Measurement



Estimate

Name

Measurement



Estimate

Name

Measurement