

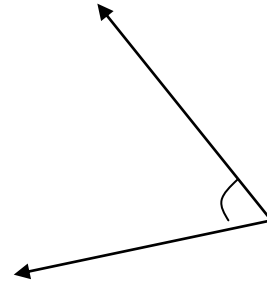
Identify the Angles – Acute, Right, Obtuse & Straight

Is this angle greater than, equal to or less than a right angle?




- Acute
- Right
- Obtuse
- Straight

Is this angle greater than, equal to or less than a right angle?



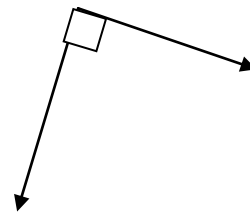
- Acute
- Right
- Obtuse
- Straight

Is this angle greater than, equal to or less than a right angle?



- Acute
- Right
- Obtuse
- Straight

Is this angle greater than, equal to or less than a right angle?



- Acute
- Right
- Obtuse
- Straight