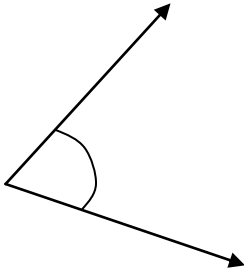
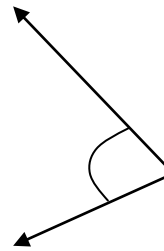


### Identify the Angles – Acute, Right, Obtuse & Straight

Is this angle greater than, equal to or less than a right angle?



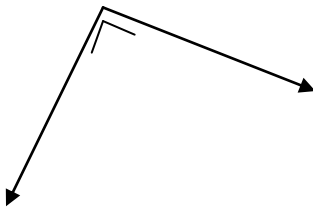
Is this angle greater than, equal to or less than a right angle?



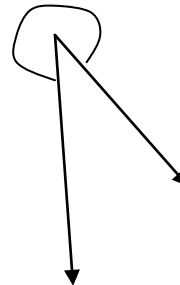
- Greater than a right angle
- Less than a right angle
- Equal to a right angle

- Greater than a right angle
- Less than a right angle
- Equal to a right angle

Is this angle greater than, equal to or less than a right angle?



Is this angle greater than, equal to or less than a right angle?



- Greater than a right angle
- Less than a right angle
- Equal to a right angle

- Greater than a right angle
- Less than a right angle
- Equal to a right angle