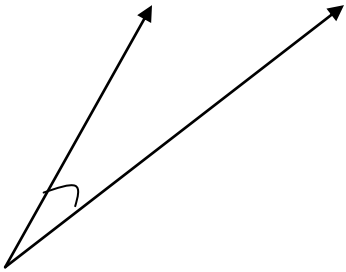
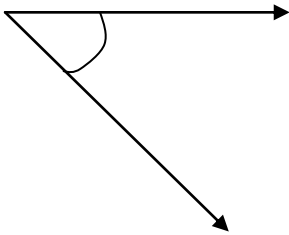


### Identify different types of Angles



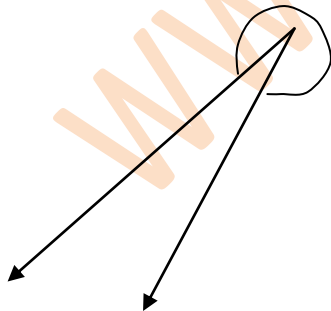
- Acute
- Obtuse
- Right
- Straight



- Acute
- Obtuse
- Right
- Straight



- Acute
- Obtuse
- Right
- Straight



- Acute
- Obtuse
- Right
- Straight