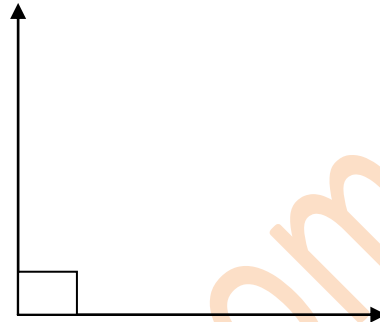
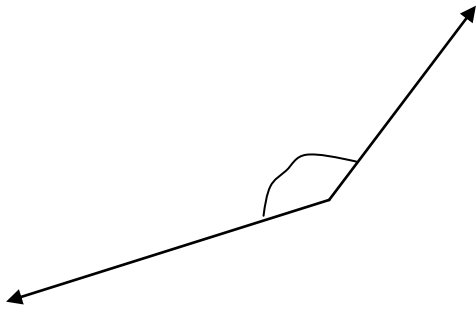
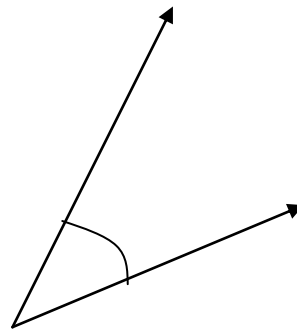
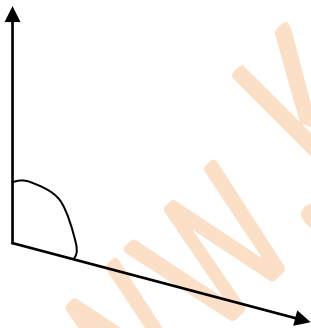


Are these angles greater than, equal to or less than 90°?



- Greater than a Right Angle
- Equal to a Right Angle
- Less than a Right Angle

- Greater than a Right Angle
- Equal to a Right Angle
- Less than a Right Angle



- Greater than a Right Angle
- Equal to a Right Angle
- Less than a Right Angle

- Greater than a Right Angle
- Equal to a Right Angle
- Less than a Right Angle